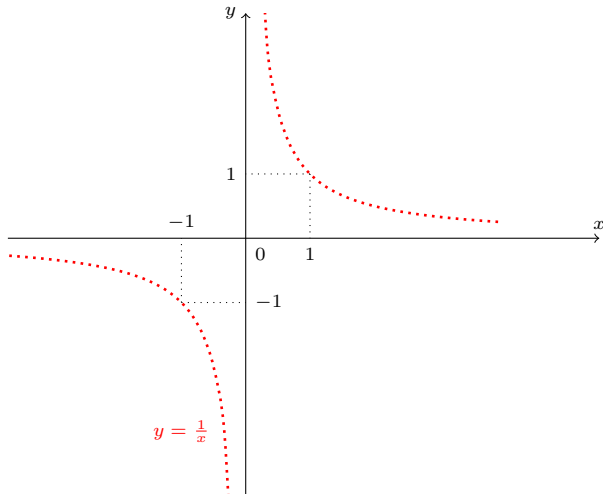


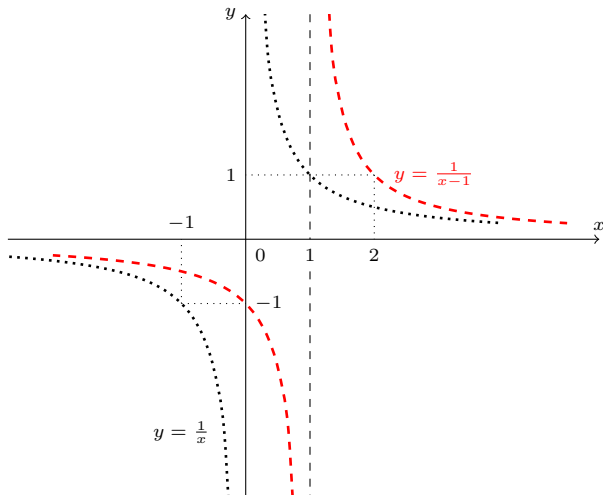
Upravíme: $y = \frac{x}{1-x} = \frac{x-1+1}{1-x} = -1 - \frac{1}{x-1}$. Zakreslíme postupně:

1. $y = \frac{1}{x}$ 2. $y = \frac{1}{x-1}$ 3. $y = -\frac{1}{x-1}$ 4. $y = -1 - \frac{1}{x-1}$



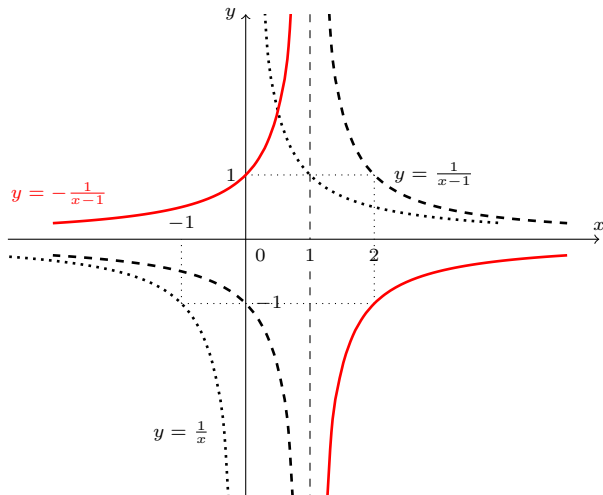
Upravíme: $y = \frac{x}{1-x} = \frac{x-1+1}{1-x} = -1 - \frac{1}{x-1}$. Zakreslíme postupně:

1. $y = \frac{1}{x}$ 2. $y = \frac{1}{x-1}$ 3. $y = -\frac{1}{x-1}$ 4. $y = -1 - \frac{1}{x-1}$



Upravíme: $y = \frac{x}{1-x} = \frac{x-1+1}{1-x} = -1 - \frac{1}{x-1}$. Zakreslíme postupně:

1. $y = \frac{1}{x}$ 2. $y = \frac{1}{x-1}$ 3. $y = -\frac{1}{x-1}$ 4. $y = -1 - \frac{1}{x-1}$



Upravíme: $y = \frac{x}{1-x} = \frac{x-1+1}{1-x} = -1 - \frac{1}{x-1}$. Zakreslíme postupně:

1. $y = \frac{1}{x}$ 2. $y = \frac{1}{x-1}$ 3. $y = -\frac{1}{x-1}$ 4. $y = -1 - \frac{1}{x-1}$

